



CANDIDATE
NAME

--

CENTRE
NUMBER

--	--	--	--	--

CANDIDATE
NUMBER

--	--	--	--

4037/22

May/June 2024

2 hours

You must answer on the question paper.

No additional materials are needed.

- Answer **all** questions.
- Use a black or dark blue pen. You may use an HB pencil for any diagrams or graphs.
- Write your name, centre number and candidate number in the boxes at the top of the page.
- Write your answer to each question in the space provided.
- Do **not** use an erasable pen or correction fluid.
- Do **not** write on any bar codes.
- You should use a calculator where appropriate.
- You must show all necessary working clearly; no marks will be given for unsupported answers from a calculator.
- Give non-exact numerical answers correct to 3 significant figures, or 1 decimal place for angles in degrees, unless a different level of accuracy is specified in the question.

- The total mark for this paper is 80.
- The number of marks for each question or part question is shown in brackets [].

This document has **16** pages. Any blank pages are indicated.

Mathematical Formulae**1. ALGEBRA***Quadratic Equation*

For the equation $ax^2 + bx + c = 0$,

$$x = \frac{-b \pm \sqrt{b^2 - 4ac}}{2a}$$

Binomial Theorem

$$(a + b)^n = a^n + \binom{n}{1}a^{n-1}b + \binom{n}{2}a^{n-2}b^2 + \dots + \binom{n}{r}a^{n-r}b^r + \dots + b^n$$

where n is a positive integer and $\binom{n}{r} = \frac{n!}{(n-r)!r!}$

Arithmetic series $u_n = a + (n-1)d$

$$S_n = \frac{1}{2}n(a + l) = \frac{1}{2}n\{2a + (n-1)d\}$$

Geometric series $u_n = ar^{n-1}$

$$S_n = \frac{a(1-r^n)}{1-r} \quad (r \neq 1)$$

$$S_\infty = \frac{a}{1-r} \quad (|r| < 1)$$

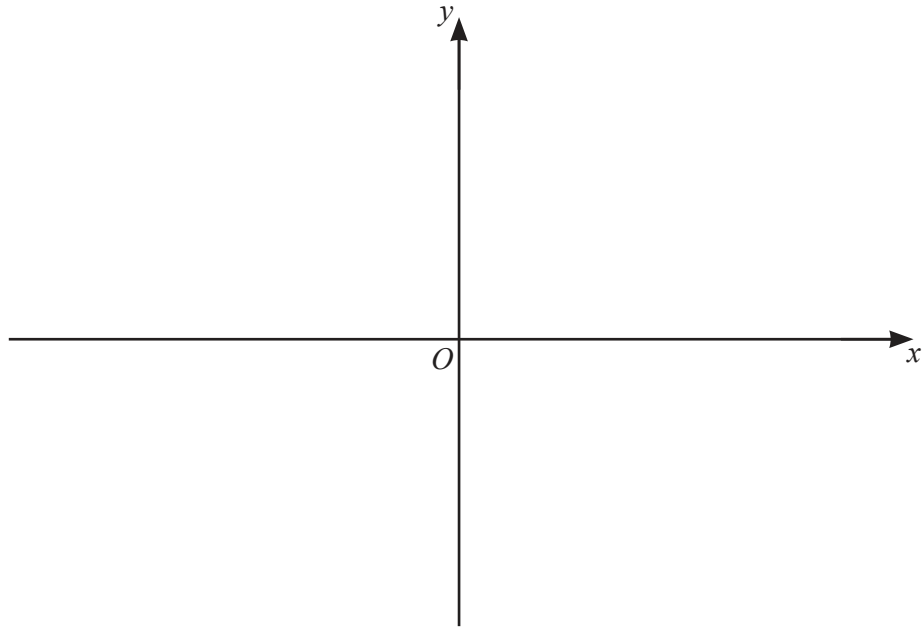
2. TRIGONOMETRY*Identities*

$$\begin{aligned}\sin^2 A + \cos^2 A &= 1 \\ \sec^2 A &= 1 + \tan^2 A \\ \operatorname{cosec}^2 A &= 1 + \cot^2 A\end{aligned}$$

Formulae for $\triangle ABC$

$$\begin{aligned}\frac{a}{\sin A} &= \frac{b}{\sin B} = \frac{c}{\sin C} \\ a^2 &= b^2 + c^2 - 2bc \cos A \\ \Delta &= \frac{1}{2}bc \sin A\end{aligned}$$

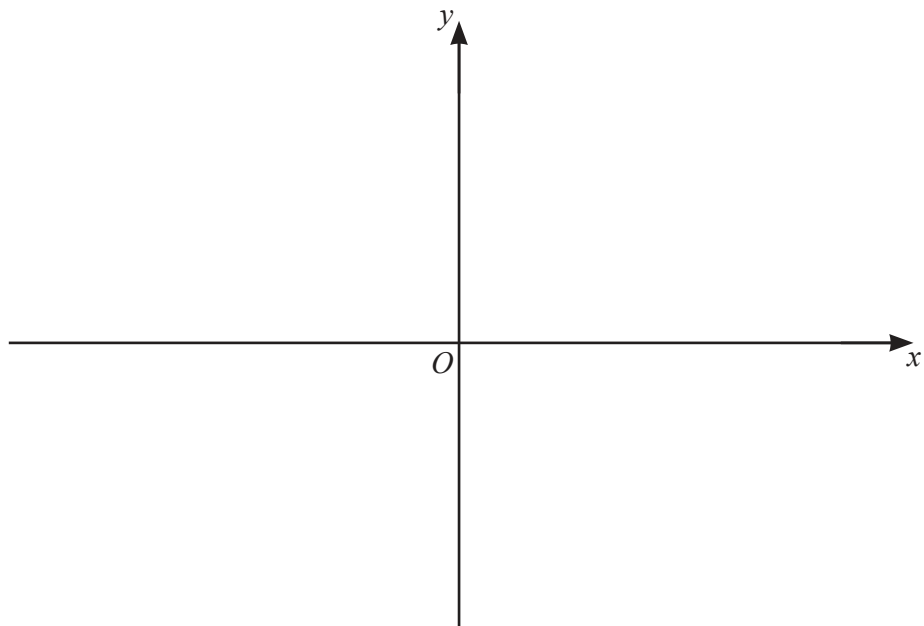
- 1 (a) On the axes, sketch the graph of $y = (2x - 5)(x + 3)(1 - x)$, stating the intercepts with the coordinate axes. [3]



(b) Hence

- (i) solve the inequality $(2x - 5)(x + 3)(1 - x) \leq 0$ [2]

- (ii) on the axes below, sketch the graph of $y = |(2x - 5)(x + 3)(1 - x)|$. [1]



2 (a) Evaluate $\int_{\frac{\pi}{3}}^{\frac{\pi}{2}} \cos \frac{x}{4} dx$. You must show all your working. [4]

(b) Find $\int \left(\frac{1}{4x-3} + \frac{1}{x^3} \right) dx$. [3]

- 3 (a) Determine whether the equation $\frac{(4x+1)(3x+2)}{5x-3} = x+1$ has two distinct real roots, two equal roots or no real roots. [4]

- (b) Solve the equation $\frac{12}{\sqrt[3]{x}} - \sqrt[3]{x} = 4$. [4]

4 The polynomial p is such that $p(x) = 6x^3 + x^2 - 12x + 5$.

(a) Find the remainder when $p(x)$ is divided by $x - 2$. [1]

(b) (i) Show that $2x - 1$ is a factor of $p(x)$. [1]

(ii) Hence write $p(x)$ as a product of linear factors. [3]

(iii) Hence solve the equation $6 \sin^3 \theta + \sin^2 \theta - 12 \sin \theta + 5 = 0$ for $0^\circ \leq \theta \leq 90^\circ$. [2]

- 5 A curve has equation $y = 5e^{2x-1} + e$. The tangent to the curve at the point where $x = 1$ cuts the x -axis at the point P .

Find the equation of the tangent in the form $y = mx + c$, where m and c are exact values, and hence find the x -coordinate of P . [6]

- 6 (a) Show that $\sin^3 x \left(\frac{\operatorname{cosec} x}{\cot x} \right)$ can be written as $\sin^2 x \tan x$. [3]

- (b) Solve the equation $\cos^2 x \tan x - \frac{1}{2} \tan x = 0$ for $-\pi < x < \pi$. [5]

7 Find the number of different ways the 9 letters of the word POLYMATHS can be arranged when

(a) the O and A are **not** next to each other

[2]

(b) the letters MATHS are together in this order.

[2]

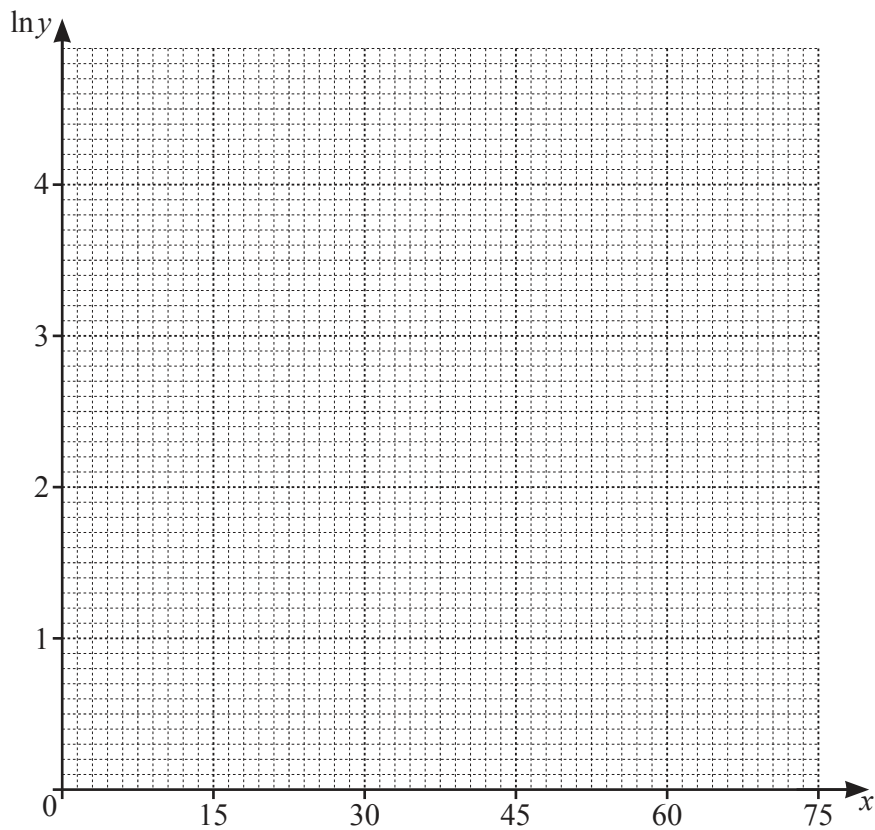
- 8 An experiment was carried out and values of y for certain values of x were recorded. The table shows the values recorded.

x	15	30	45	60	75
y	10	13	22	35	50

The relationship between y and x is modelled by $y = Ae^{kx}$, where A and k are constants.

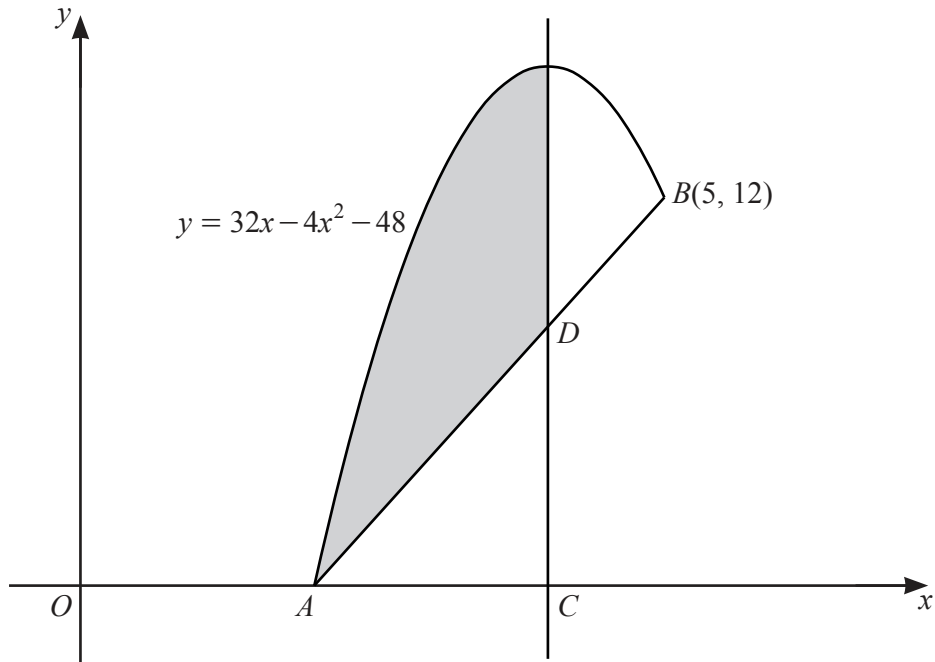
- (a) Draw a straight line graph for $\ln y$ against x .

[2]



- (b) Find the equation of the line in **part (a)** and hence find the values of A and k . Give each value correct to 1 significant figure. [5]

- (c) Find the value of x for which $y = 17$. [2]



The diagram shows part of the curve $y = 32x - 4x^2 - 48$ and the line AB .
The curve and the line AB meet the x -axis at A and meet again at the point $B(5, 12)$.
The line CD extended is parallel to the y -axis and passes through the maximum point of the curve.
Find the area of the shaded region.

[9]

Continuation of working space for Question 9.

10 The functions f and fg are defined by

$$f(x) = e^{x^2+3} \quad \text{for } x < 0$$

$$fg(x) = e^{2x} \quad \text{for } x > \frac{3}{2}.$$

(a) Explain why f^{-1} exists. [1]

(b) Find an expression for $f^{-1}(x)$ and state the domain and range of f^{-1} . [5]

(c) Hence find and simplify an expression for $g(x)$. [2]

- 11 In the binomial expansion of $\left(2 + \frac{x}{2}\right)^n$, the first three terms in increasing powers of x are $b + abx + \frac{9}{8}abx^2$. Find the values of the constants n , a and b .

[8]

BLANK PAGE

Permission to reproduce items where third-party owned material protected by copyright is included has been sought and cleared where possible. Every reasonable effort has been made by the publisher (UCLES) to trace copyright holders, but if any items requiring clearance have unwittingly been included, the publisher will be pleased to make amends at the earliest possible opportunity.

To avoid the issue of disclosure of answer-related information to candidates, all copyright acknowledgements are reproduced online in the Cambridge Assessment International Education Copyright Acknowledgements Booklet. This is produced for each series of examinations and is freely available to download at www.cambridgeinternational.org after the live examination series.

Cambridge Assessment International Education is part of Cambridge Assessment. Cambridge Assessment is the brand name of the University of Cambridge Local Examinations Syndicate (UCLES), which is a department of the University of Cambridge.